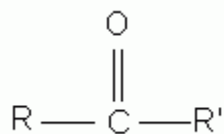
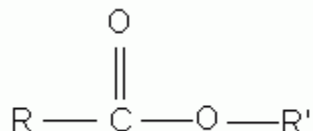
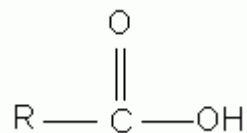
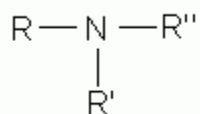
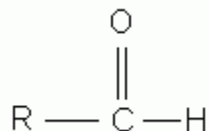
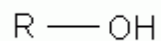


Recognizing Functional Groups

Worksheet

Match each of the functional groups with the name on the right. Remember **R** refers to the generic hydrocarbon chain to which the functional group is attached.



aldehyde

ether

halide

alcohol

ketone

amine

carboxylic acid

ester