

# Quiz #34 Alkanes

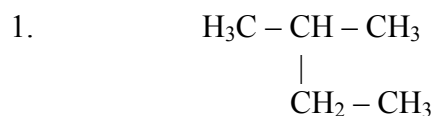
KEY

Name: \_\_\_\_\_

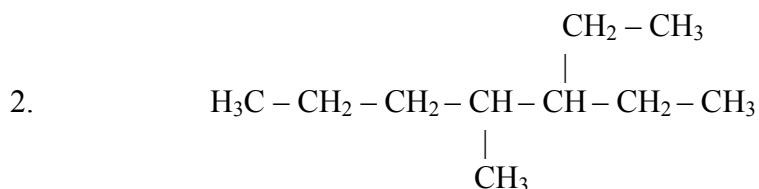
Block: \_\_\_\_\_

Date: \_\_\_\_\_

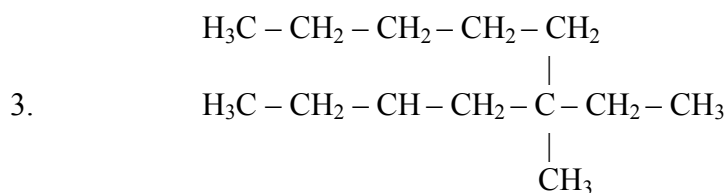
Name these hydrocarbons:



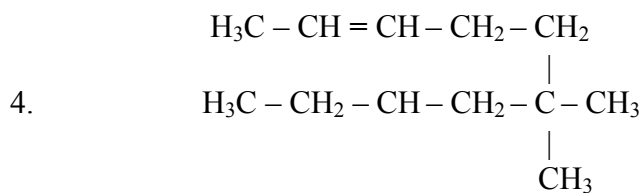
Name: **2-methylbutane**



Name: **3-ethyl-4-methylheptane**



Name: **5-ethyl-5-methyldecane**



Name: **6,6-dimethyl-2-decene**