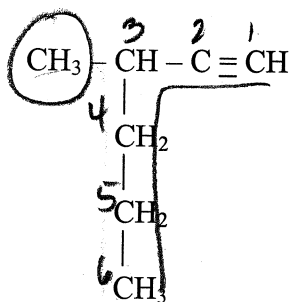


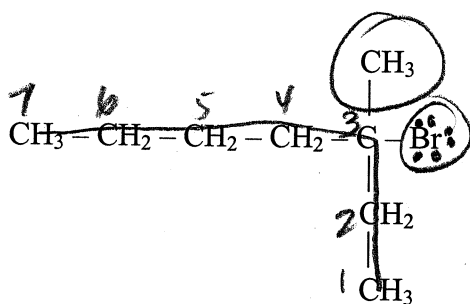
Alkanes, Alkenes, Alkynes with branched substituent groups WORKSHEET #3

Name these hydrocarbons.

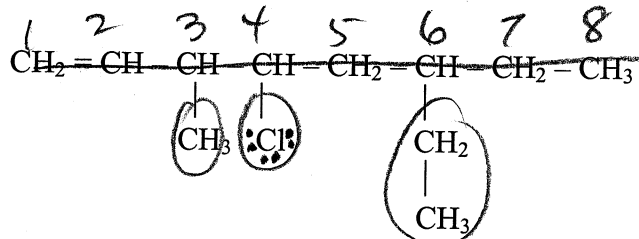
KEY



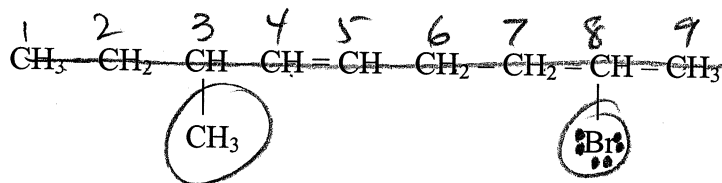
3-methyl-1-hexyne



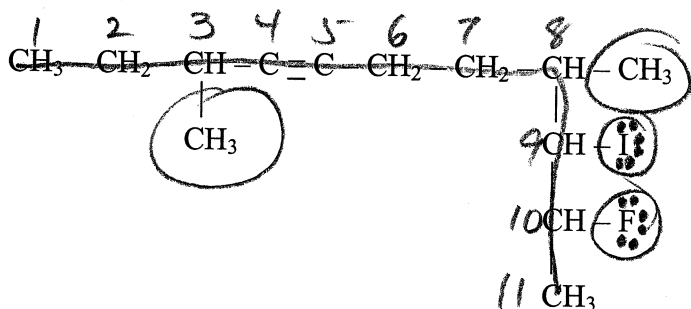
3-bromo-3-methylheptane



4-chloro-6-ethyl-
3-methyl-1-octene



8-bromo-3-methyl-
4-nonene



10-fluoro-9-iodo-
3,8-dimethyl-
4-undecyne